


Nume: _____

Data: _____

Înțelegerea fracțiilor


Unește fiecare imagine cu fracția care o descrie cel mai bine.




$$\frac{1}{4}$$



$$\frac{2}{4}$$



$$\frac{3}{4}$$



$$\frac{4}{4}$$