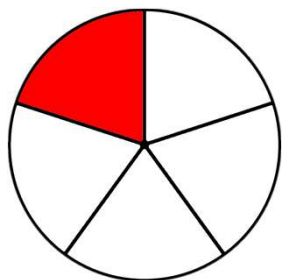


Nume: \_\_\_\_\_

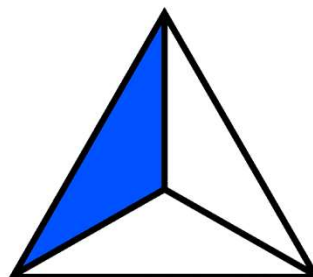
Data: \_\_\_\_\_

# Înțelegerea fracțiilor


Încercuiește fracția care reprezintă cel mai bine fiecare ilustrație.



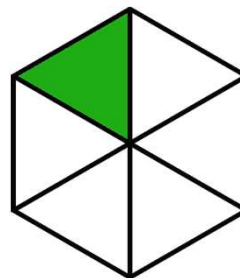
$\frac{1}{3}$     $\frac{1}{4}$     $\frac{1}{5}$     $\frac{1}{6}$     $\frac{1}{8}$     $\frac{1}{10}$



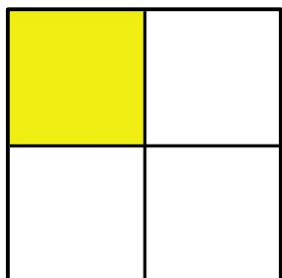
$\frac{1}{3}$     $\frac{1}{4}$     $\frac{1}{5}$     $\frac{1}{6}$     $\frac{1}{8}$     $\frac{1}{10}$



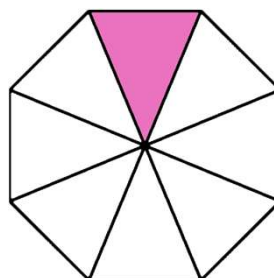
$\frac{1}{3}$     $\frac{1}{4}$     $\frac{1}{5}$     $\frac{1}{6}$     $\frac{1}{8}$     $\frac{1}{10}$



$\frac{1}{3}$     $\frac{1}{4}$     $\frac{1}{5}$     $\frac{1}{6}$     $\frac{1}{8}$     $\frac{1}{10}$



$\frac{1}{3}$     $\frac{1}{4}$     $\frac{1}{5}$     $\frac{1}{6}$     $\frac{1}{8}$     $\frac{1}{10}$



$\frac{1}{3}$     $\frac{1}{4}$     $\frac{1}{5}$     $\frac{1}{6}$     $\frac{1}{8}$     $\frac{1}{10}$