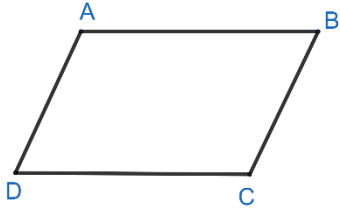


### Fișa PATRULATERE

1. Identifică unghiurile opuse ale paralelogramului

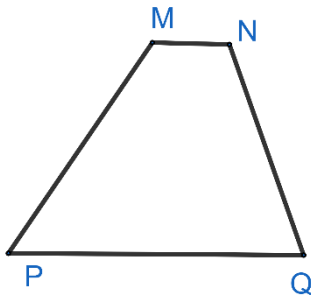


.....  
.....  
.....

2. Un pătrat are perimetrul  $12\text{cm}$ . Află lungimea unei laturi.

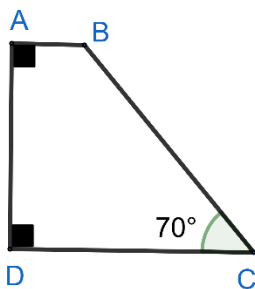
.....  
.....

3. Identifică laturile neparalele ale trapezului



.....  
.....

4. Găsește măsura  $\sphericalangle B$  al trapezului



.....  
.....

