


Nume: _____


Data: _____

Înțelegerea operației de înmulțire


Observă modelul. Colorează casetele din fiecare grilă pentru a ilustra operațiile de sub acestea și completează rezultatul.




$$5 \times 4 = 20$$




$$6 \times 3 = \square$$




$$8 \times 2 = \square$$



$$4 \times 7 = \square$$



$$2 \times 3 = \square$$



$$5 \times 6 = \square$$