


Nume: _____


Data: _____

Înțelegerea operației de înmulțire


Privește imaginile. Completează operațiile de înmulțire.



$$6 \times 3 = 18$$




$$\square \times \square = \square$$



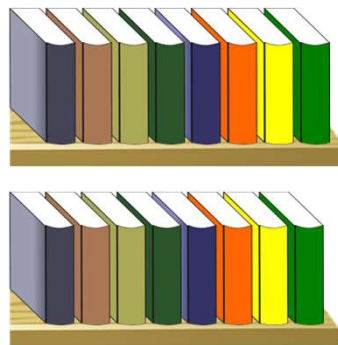
$$\square \times \square = \square$$



$$\square \times \square = \square$$



$$\square \times \square = \square$$



$$\square \times \square = \square$$