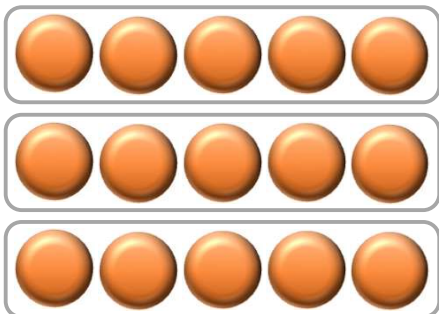


Nume: _____

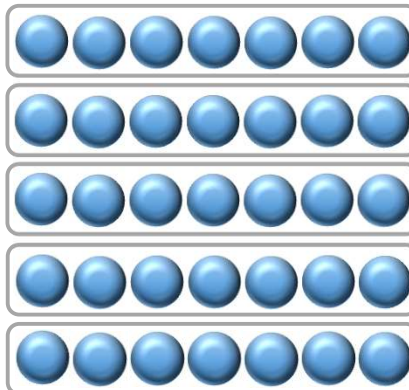
Data: _____

Înțelegerea operației de împărțire

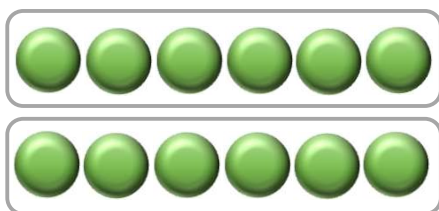
Privește imaginile. Observă modelul și completează operațiile de împărțire.



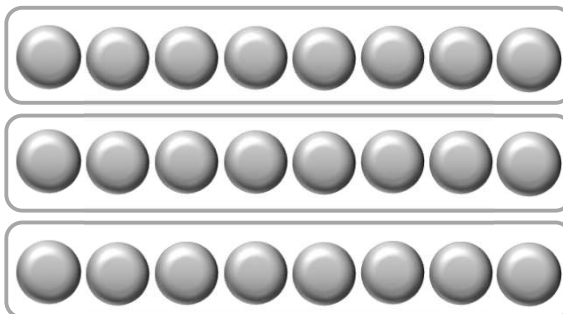
$$15 : 3 = 5$$



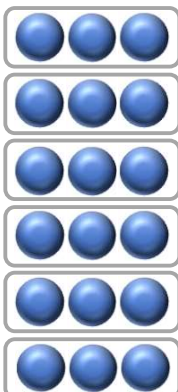
$$\square : \square = \square$$




$$\square : \square = \square$$



$$\square : \square = \square$$



$$\square : \square = \square$$



$$\square : \square = \square$$